

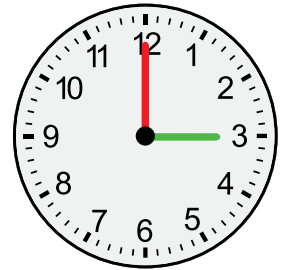
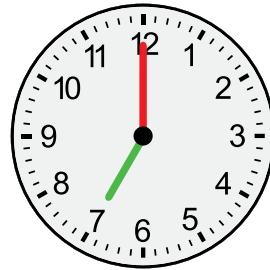
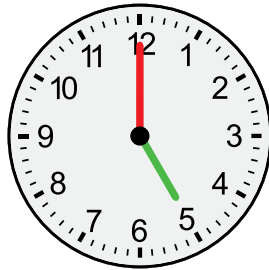


NAME _____

DATE _____

MATCH THE CLOCKS

Draw a line to match the clocks that show the same time.



5:00

3:00

2:00

7:00

11:00

10:00

8:00

4:00

