



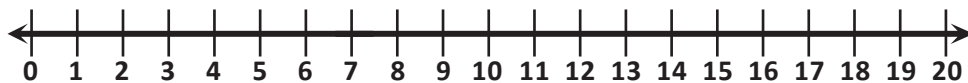
NAME _____

DATE _____

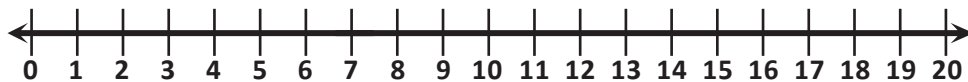
ADDITION ON NUMBER LINE

Show each problem on number line and write the correct answer.

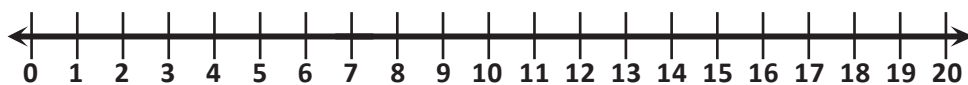
$6 + 1 =$



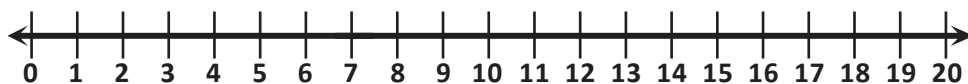
$6 + 2 =$



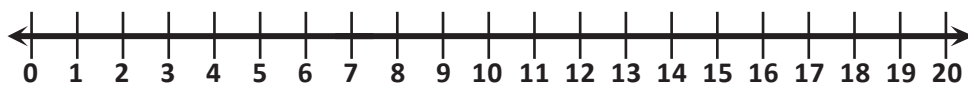
$6 + 3 =$



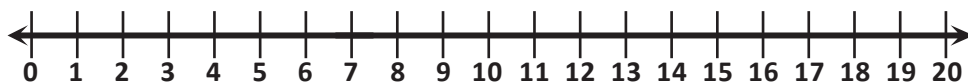
$6 + 4 =$



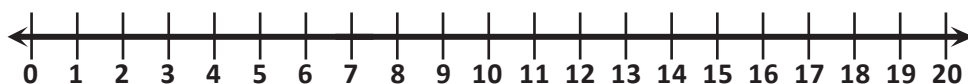
$6 + 5 =$



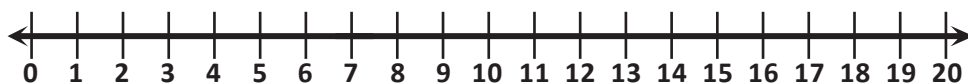
$6 + 6 =$



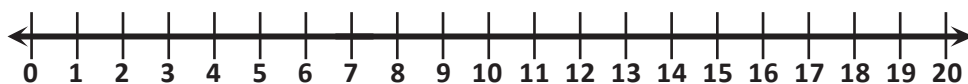
$6 + 7 =$



$6 + 8 =$



$6 + 9 =$



$6 + 10 =$

