



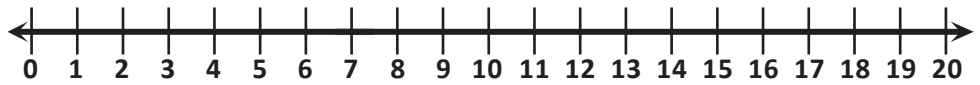
NAME _____

DATE _____

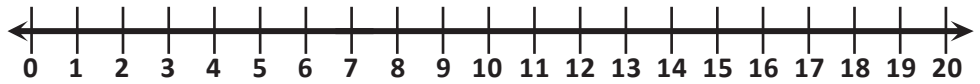
ADDITION ON NUMBER LINE

Show each problem on number line and write the correct answer.

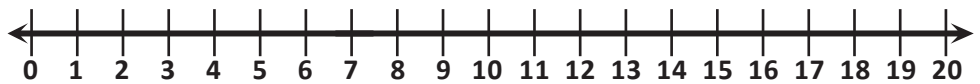
$9 + 1 =$



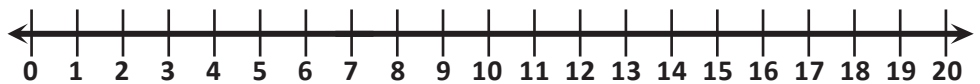
$9 + 2 =$



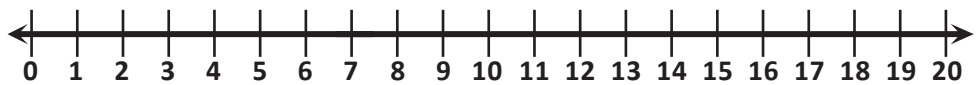
$9 + 3 =$



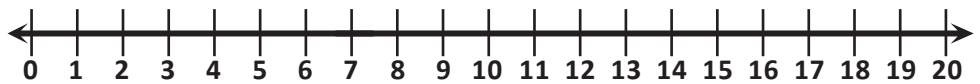
$9 + 4 =$



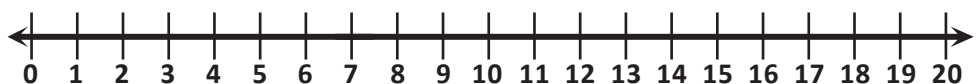
$9 + 5 =$



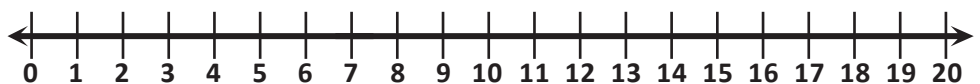
$9 + 6 =$



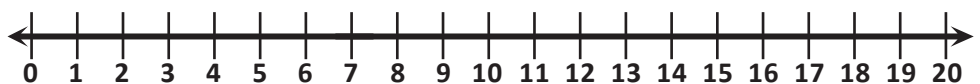
$9 + 7 =$



$9 + 8 =$



$9 + 9 =$



$9 + 10 =$

