

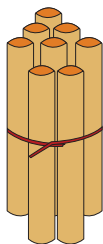


NAME \_\_\_\_\_

DATE \_\_\_\_\_

# ADDITION

Count the sticks, add and write the correct number.



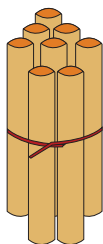
8

+



1

=



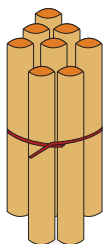
8

+



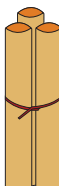
2

=



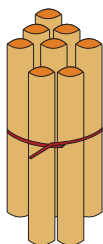
8

+



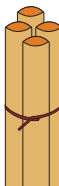
3

=



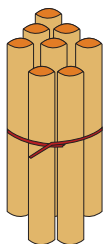
8

+



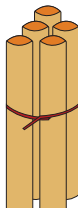
4

=



8

+



5

=