

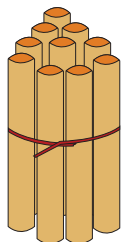


NAME _____

DATE _____

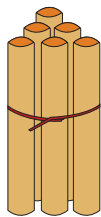
ADDITION

Count the sticks, add and write the correct number.



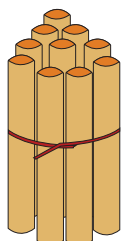
10

+



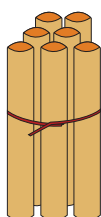
6

=



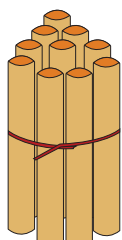
10

+



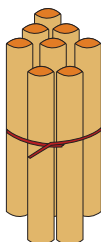
7

=



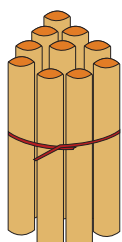
10

+



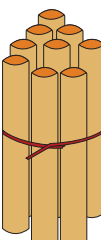
8

=



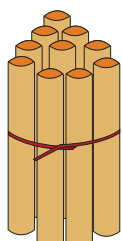
10

+



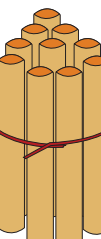
9

=



10

+



10

=