

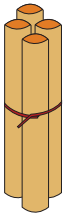


NAME \_\_\_\_\_

DATE \_\_\_\_\_

# ADDITION

Count the sticks, add and write the correct number.



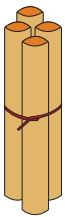
4

+



1

=



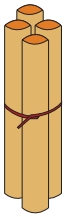
4

+



2

=



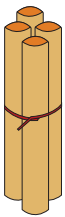
4

+



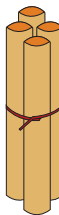
3

=



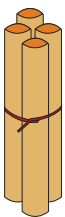
4

+



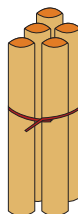
4

=



4

+



5

=