



NAME _____

DATE _____

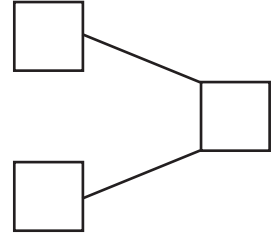
CAMPARING THE NUMBERS

Count the objects and fill in the number bond and place value chart. Complete the sentences to add the tens and ones.

1)  $5 \times 10 = 50$
 $6 \times 1 = 6$

$50 + 6 = \underline{\quad}$

How much 56 is more than 50 ? Ans: $\underline{\quad}$.

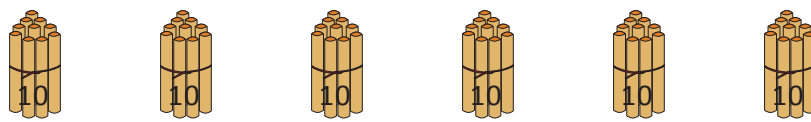



2)  $7 \times 10 = 70$
 $4 \times 1 = 4$

$70 + 4 = \underline{\quad}$

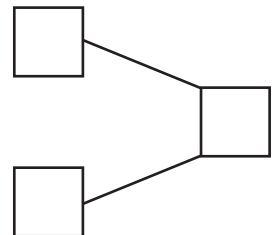
How much 74 is more than 70 ? Ans: $\underline{\quad}$.



Tens	Ones

3)  $6 \times 10 = 60$
 $5 \times 1 = 5$

$60 + 5 = \underline{\quad}$

How much 65 is more than 60 ? Ans: $\underline{\quad}$.



4)  $9 \times 10 = 90$
 $4 \times 1 = 4$

$90 + 4 = \underline{\quad}$

How much 94 is more than 90 ? Ans: $\underline{\quad}$.

Tens	Ones