



NAME _____

DATE _____

COMPARING NUMBERS


Circle the fish that is eating the greater number.

a) 32 

 33

b) 34 

 35

c) 36 

 37

d) 27 

 29

e) 31 

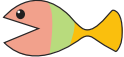
 29

f) 27 

 37

g) 23 

 19

h) 26 


 13

i) 32 

 44

j) 22 

 11

k) 34 

 15

l) 6 

 10

m) 14 

 10

n) 37 

 38

o) 21 

 13