



NAME _____

DATE _____

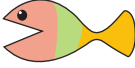
COMPARING

Complete the charts so that the fish is eating the greater number.

Examples:

i)

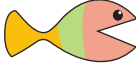
Tens	Ones
2	0



Tens	Ones
1	1

ii)

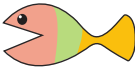
Tens	Ones
1	8



Tens	Ones
2	1

a)

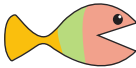
Tens	Ones
3	0



Tens	Ones
	9

e)

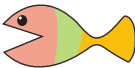
Tens	Ones
1	



Tens	Ones
3	6

b)

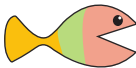
Tens	Ones
3	



Tens	Ones
1	8

f)

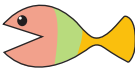
Tens	Ones
	2



Tens	Ones
3	1

c)

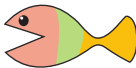
Tens	Ones
3	



Tens	Ones
3	7

g)


Tens	Ones
2	



Tens	Ones
1	9

d)


Tens	Ones
2	0



Tens	Ones
	6

h)

Tens	Ones
	1



Tens	Ones
2	0