



NAME _____

DATE _____

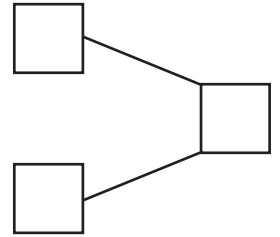
CAMPARING THE NUMBERS



Count the objects and fill in the number bond and place value chart. Complete the sentences to add the tens and ones.

1)  $9 \times 10 = 90$
 $2 \times 1 = 2$

$90 + 2 = \underline{\quad}$

How much 92 is more than 90 ? Ans: $\underline{\quad}$.





2)  $4 \times 10 = 40$
 $9 \times 1 = 9$

$40 + 9 = \underline{\quad}$

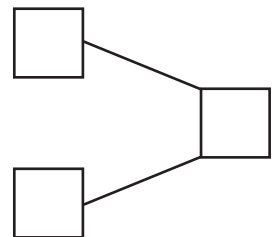
How much 49 is more than 40 ? Ans: $\underline{\quad}$.

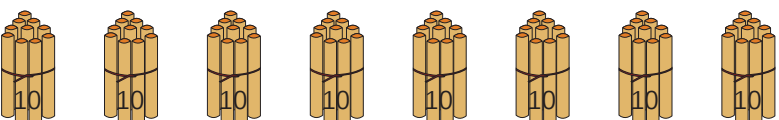
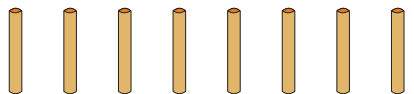
Tens	Ones

3)  $7 \times 10 = 70$
 $6 \times 1 = 6$

$70 + 6 = \underline{\quad}$

How much 76 is more than 70 ? Ans: $\underline{\quad}$.



4)  $8 \times 10 = 80$
 $8 \times 1 = 8$

$80 + 8 = \underline{\quad}$

How much 88 is more than 80 ? Ans: $\underline{\quad}$.

Tens	Ones