





NAME \_\_\_\_\_

DATE \_\_\_\_\_

## CAMPARING THE NUMBERS

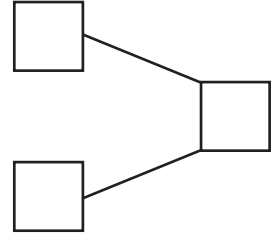
Count the objects and fill in the number bond and place value chart. Complete the sentences to add the tens and ones.


1)   $9 \times 10 = 90$


  $6 \times 1 = 6$

$90 + 6 = \underline{\quad}$

How much 96 is more than 90 ? Ans:  $\underline{\quad}$ .




2)   $5 \times 10 = 50$


  $5 \times 1 = 5$

$50 + 5 = \underline{\quad}$

How much 55 is more than 50 ? Ans:  $\underline{\quad}$ .

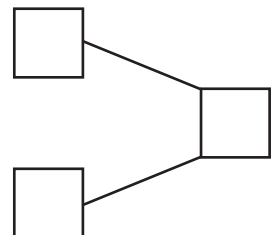
Tens	Ones

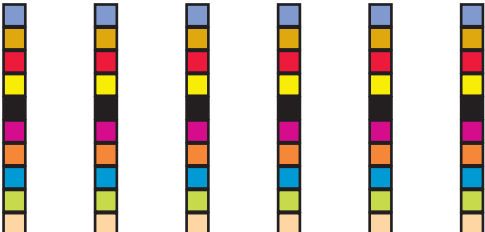
3)   $4 \times 10 = 40$


  $6 \times 1 = 6$

$40 + 6 = \underline{\quad}$

How much 46 is more than 40 ? Ans:  $\underline{\quad}$ .



4)   $6 \times 10 = 60$

  $1 \times 1 = 1$

$60 + 1 = \underline{\quad}$

How much 61 is more than 60 ? Ans:  $\underline{\quad}$ .

Tens	Ones