



NAME _____

DATE _____

COUNTING

Draw quick tens and ones to show each number. Label the first drawing as less than, greater than or equal to the second drawing. Write a phrase from the word bank to compare the numbers.



Word Bank:

is greater than

is less than



is equal to

1)





25 _____ 30

2)





39 _____ 40

3)





29 _____ 29

4)





35 _____ 40

5)



27 _____ 24

6)



34 _____ 32