



NAME \_\_\_\_\_

DATE \_\_\_\_\_


## COMPARE FRACTIONS

Tick (✓) on the correct answer.

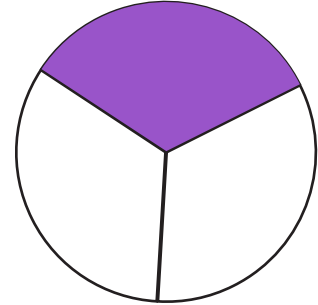
Example:

Which fraction is greater?

$\frac{1}{2}$



$\frac{1}{3}$




$\frac{1}{2}$

$\frac{1}{3}$


 neither, they are equal.

1. Which fraction is less?

$\frac{1}{4}$



$\frac{1}{2}$



$\frac{1}{2}$

$\frac{1}{4}$

 neither, they are equal.

2. Which fraction is greater?

$\frac{1}{2}$



$\frac{1}{4}$



$\frac{1}{4}$

$\frac{1}{2}$

 neither, they are equal.