



NAME _____

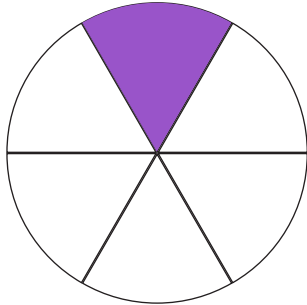
DATE _____

COMPARE FRACTIONS

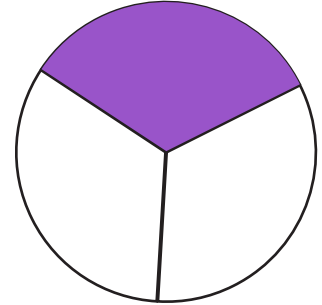
Tick (✓) on the correct answer.

1. Which fraction is less?

$\frac{1}{6}$



$\frac{1}{3}$



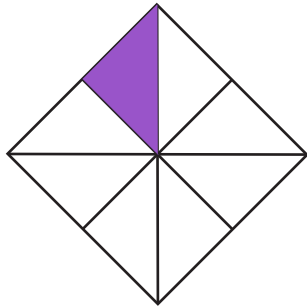
$\frac{1}{6}$

$\frac{1}{3}$

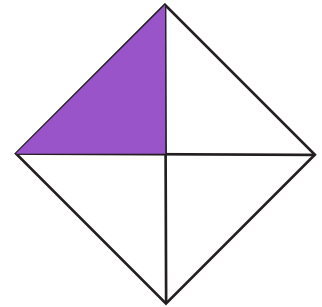
neither, they are equal.

2. Which fraction is greater?

$\frac{1}{8}$



$\frac{1}{4}$




$\frac{1}{8}$

$\frac{1}{4}$

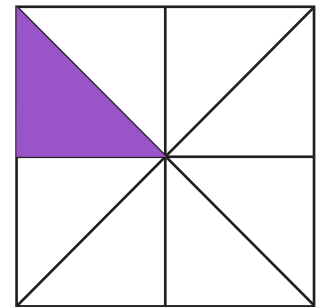
neither, they are equal.

3. Which fraction is less?

$\frac{1}{4}$



$\frac{1}{8}$



$\frac{1}{8}$

$\frac{1}{4}$

neither, they are equal.