



NAME _____

DATE _____

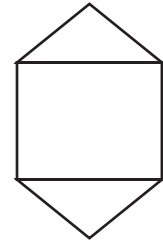
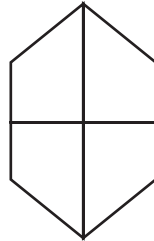
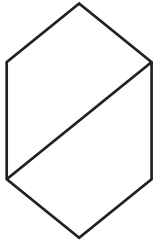
FRACTIONS

Halves, thirds and fourths.


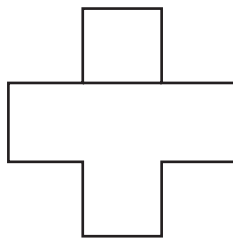

1. Which figure show a third of?



2. Which figure show a half of?



3. Which figure show a fourth of?



4. Which figure show a third of?

