




NAME \_\_\_\_\_

DATE \_\_\_\_\_

## COUNT SIDES AND CORNERS

Tick (✓) on the correct answer.


1. How many sides does this shape have?

 4 3 6 5

2. How many corners does this shape have?

 4 3 2 5

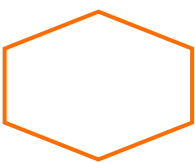
3. How many edges does this shape have?

 4 1 2 5

4. How many corners does this shape have?

 4 3 2 5

5. How many corners does this shape have?

 4 3 2 6