



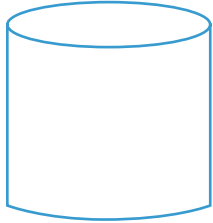
NAME _____

DATE _____

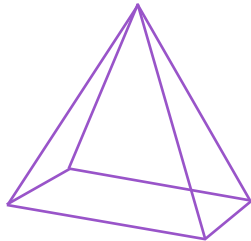
COUNT EDGES, CORNERS AND FACES

Understanding the mathematical terminology and concepts in 3D shapes.

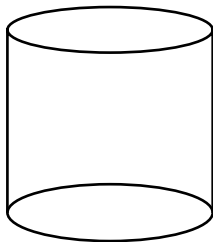
1) How many vertices does this figure have?

 2 0 6

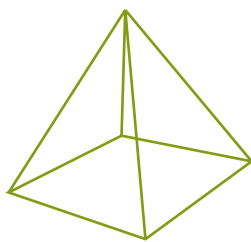
2) How many edges does this figure have?

 8 6 9

3) How many faces does this figure have?

 2 3 1

4) How many edges does this figure have?

 3 4 8