



NAME _____


DATE _____

OPEN AND CLOSED SHAPES

Is this shape open or closed?

Examples:

a)




Open



Closed

b)




Open



Closed

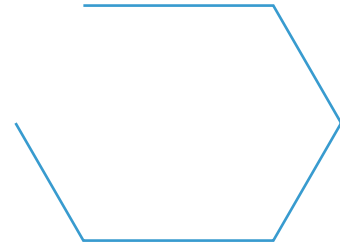
1)



Open

Closed

3)



Open

Closed

2)



Open

Closed

4)



Open

Closed