

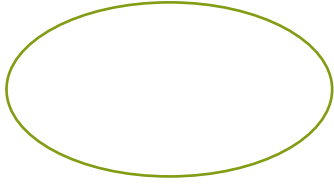


NAME _____ DATE _____

IDENTIFY 2D AND 3D SHAPES

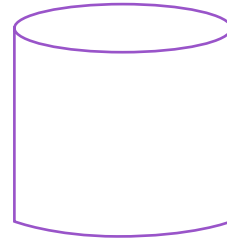
Identify the shape and circle the correct choice.

1)



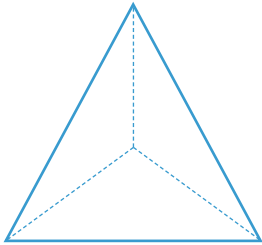
2D shape / 3D shape

2)



2D shape / 3D shape

3)



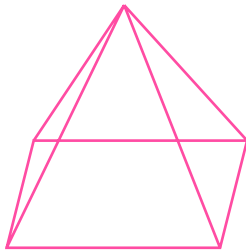
2D shape / 3D shape

4)



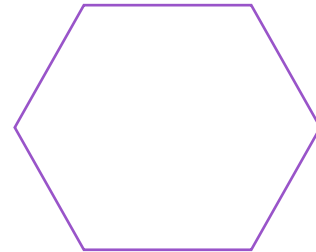
2D shape / 3D shape

5)




2D shape / 3D shape

6)



2D shape / 3D shape

7)



2D shape / 3D shape

8)



2D shape / 3D shape