

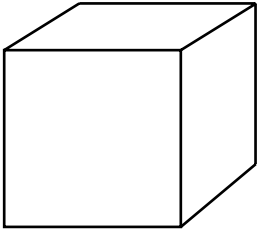


NAME _____ DATE _____

IDENTIFY 3 - DIMENSIONAL FIGURES

Which 3 - dimensional figure is this?

Example:

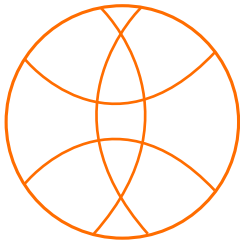


Sphere

Rectangular Cube

Cube

1)

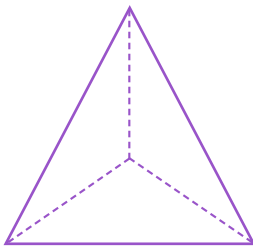


Prism

Sphere

Cylinder

2)




Prism

Cube

Rectangular Cube

3)



Cube

Cylinder

Sphere