

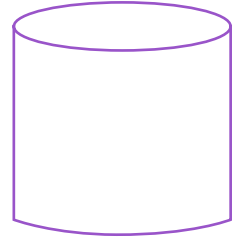
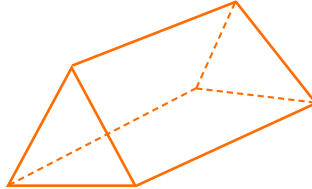
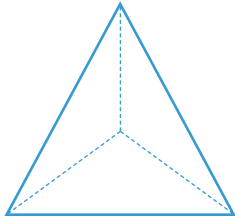


NAME _____ DATE _____

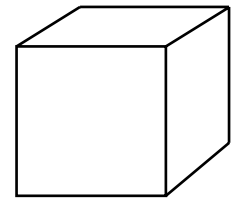
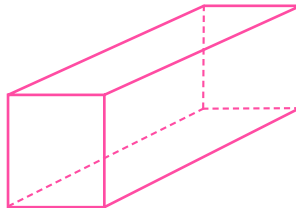

IDENTIFY 3 - DIMENSIONAL FIGURES

Which 3 - dimensional figure is this?

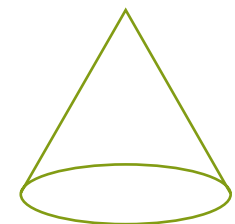
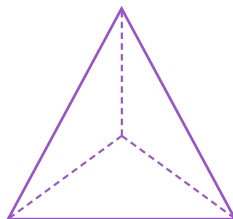
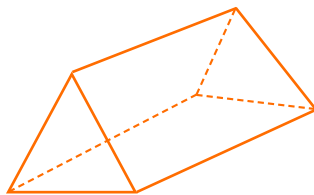
1. Which of these is a prism?



2. Which of these is a rectangular cube?



3. Which of these is a triangular prism?



4. Which of these is a sphere?

