




NAME _____ DATE _____

IDENTIFY SIDES AND CORNERS

Which attributes or characteristics are the same for shapes below.


Example:



They all have 3 sides.

They all have 3 corners.

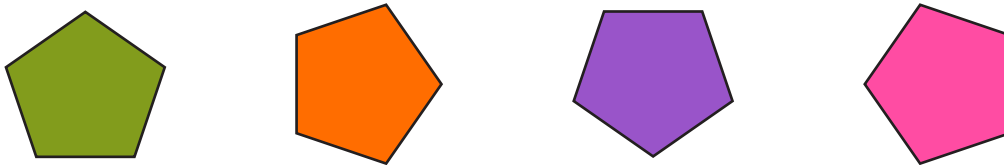
1. Which attributes or characteristics are the same for shapes below.



They all _____

They all _____

2. Which attributes or characteristics are the same for shapes below.



They all _____

They all _____

3. Which attributes or characteristics are the same for shapes below.



They all _____

They all _____