




NAME _____ DATE _____

IDENTIFY SIDES AND CORNERS

How many corners and straight lines does each of the shapes below have?

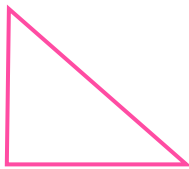
Example:



4 corners.

4 straight lines.

1)



___ corners.

___ straight lines.

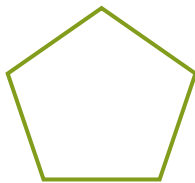
2)



___ corners.

___ straight lines.


3)



___ corners.

___ straight lines.


4)



___ corners.

___ straight lines.


5)



___ corners.

___ straight lines.

6)



___ corners.

___ straight lines.