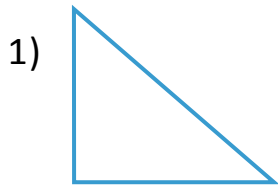




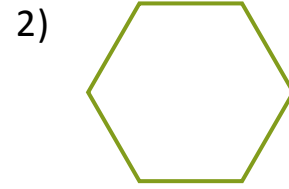
NAME _____ DATE _____

IDENTIFY SIDES AND CORNERS


How many corners and straight lines does each of the shapes below have?



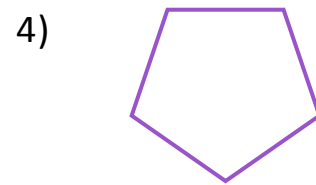
___ corners.
___ straight lines.




___ corners.
___ straight lines.




___ corners.
___ straight lines.



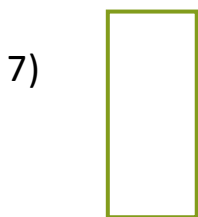
___ corners.
___ straight lines.



___ corners.
___ straight lines.



___ corners.
___ straight lines.



___ corners.
___ straight lines.



___ corners.
___ straight lines.