



NAME _____

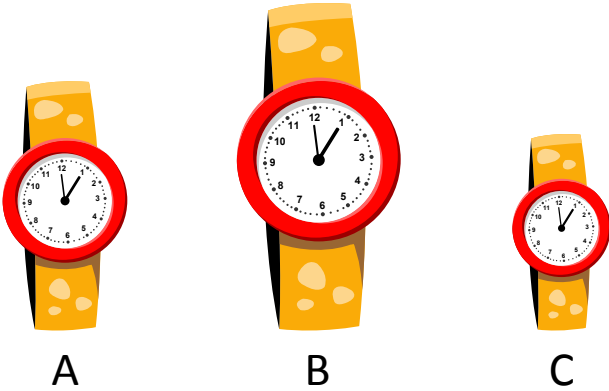
DATE _____

COMPARING LENGTHS

Resemblance of quantities.

Example:

1) Put the watches in order from shortest to tallest.




Correct order:

Watch C is shortest.

Watch B is tallest.

2) Put the soaps in order from shortest to tallest.

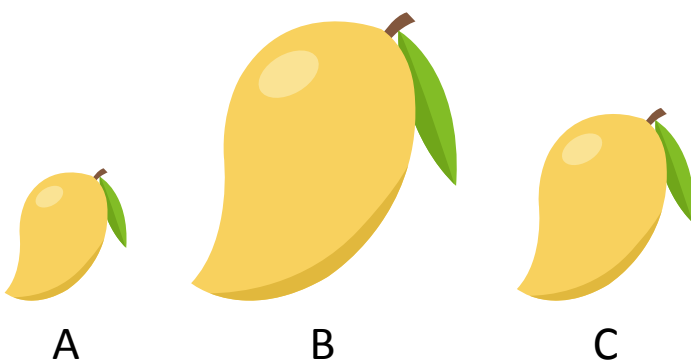


Correct order:

Soap ___ is shortest.

Soap ___ is tallest.

3) Put the mangoes in order from shortest to tallest.



Correct order:

Mango ___ is shortest.

Mango ___ is tallest.