

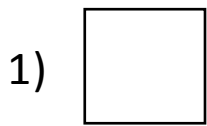


NAME _____ DATE _____

COMPARING LENGTHS

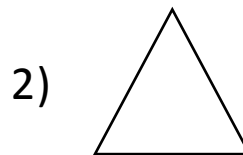
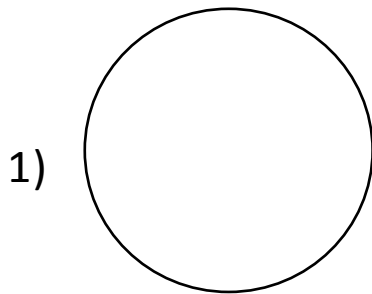
Make the sentences true by writing the words “longer than” or “shorter than”

a)



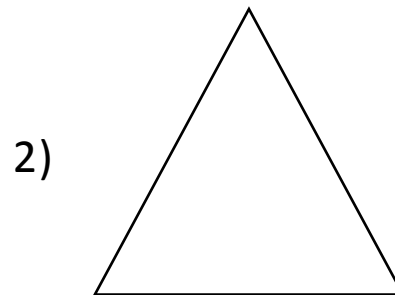
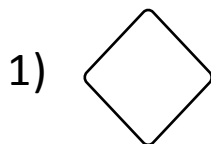
Square is _____ rectangle.

b)



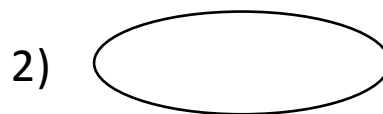
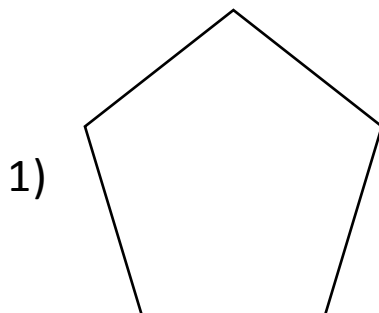
Circle is _____ triangle.

c)



Rhombus is _____ triangle.

d)



Pentagon is _____ oval.