



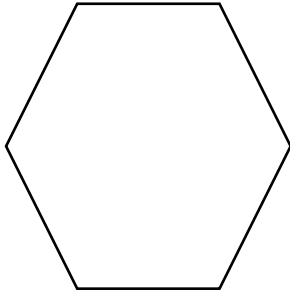
NAME _____ DATE _____

COMPARING LENGTHS


Make the sentences true by writing the words “longer than” or “shorter than”

a)

1)



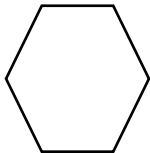
2)



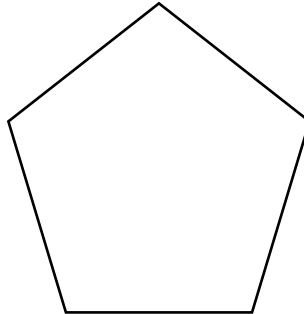
Circle is _____ hexagon.

b)

1)



2)



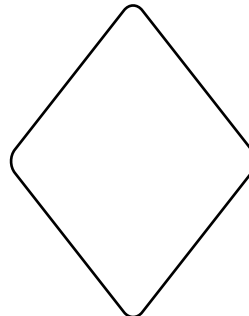
Pentagon is _____ hexagon.

c)

1)




2)



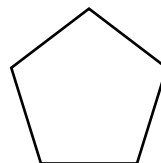
Rhombus is _____ rectangle.

d)

1)



2)



Pentagon is _____ square.