




NAME _____

DATE _____

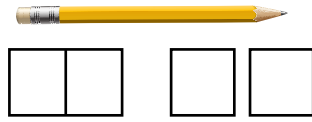
MEASURING LENGTHS

Circle the picture that shows correct way to measure.

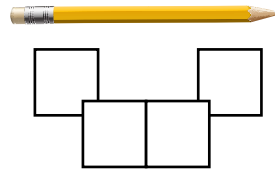
Example:



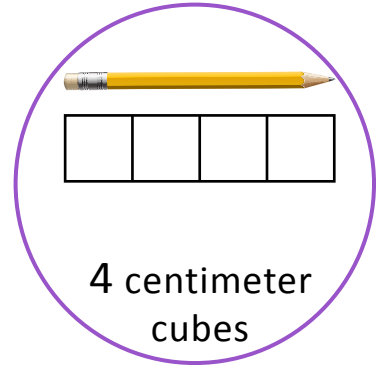
3 centimeter
cubes



4 centimeter
cubes

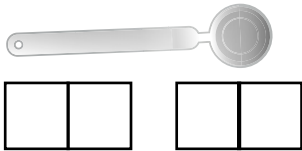


4 centimeter
cubes

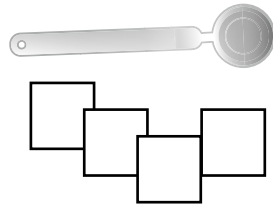


4 centimeter
cubes

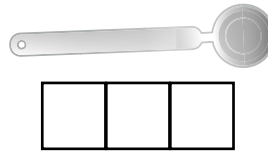
1)



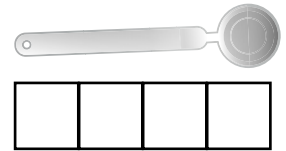
4 centimeter
cubes



4 centimeter
cubes



3 centimeter
cubes



4 centimeter
cubes

2)



5 centimeter
cubes



5 centimeter
cubes

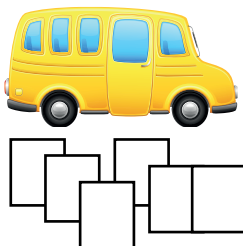


4 centimeter
cubes




3 centimeter
cubes

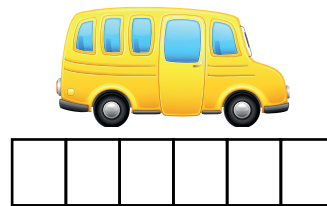
3)



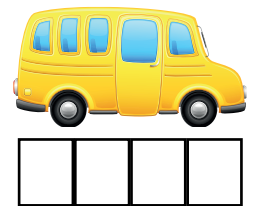
6 centimeter
cubes



4 centimeter
cubes



6 centimeter
cubes



4 centimeter
cubes