

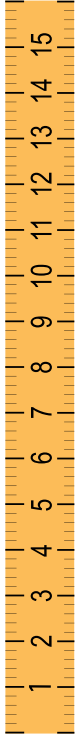


NAME _____ DATE _____

MEASURING LENGTHS


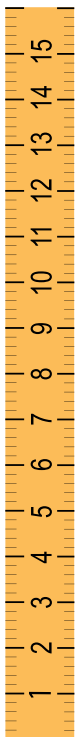
Measuring length of objects using centimeter ruler.

1) Measure the length of the ketchup and write the length in the blank given.



The ketchup is _____ long.

2) Measure the length of the toy and write the length in the blank given.



The toy is _____ long.