



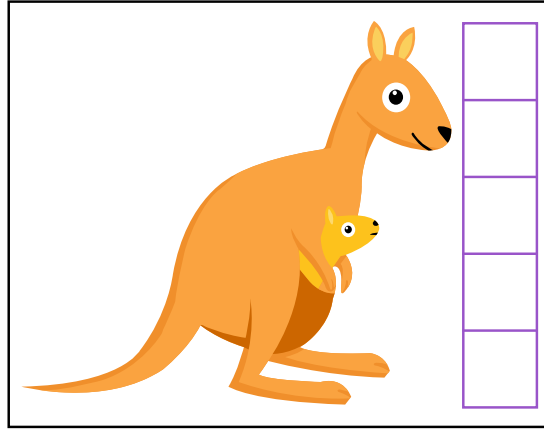
NAME _____

DATE _____


MEASUREMENTS OF VARIOUS OBJECTS

Measurements of animals.


George collected some animal stickers. Use the centimeter cubes to measure the stickers. Write the length of each stickers in the blank.



The kangaroo sticker is ___ centimeter cubes tall.



The monkey sticker is ___ centimeter cubes tall.



The viper snake sticker is ___ centimeter cubes tall.