



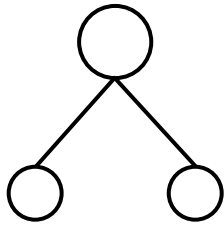
NAME _____

DATE _____

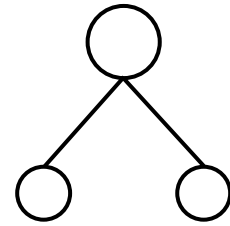
ADDITIONS

Using 5 groups show how to make ten and taking from ten to solve the two number sentences. Make a number bond and write additional number sentences that would have this number bond.

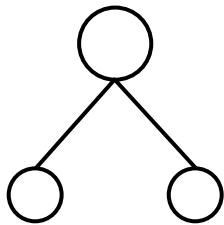
1) $9 + 9 = \underline{\quad}$



2) $18 - 9 = \underline{\quad}$



3) $9 + 2 = \underline{\quad}$



4) $11 - 9 = \underline{\quad}$

