




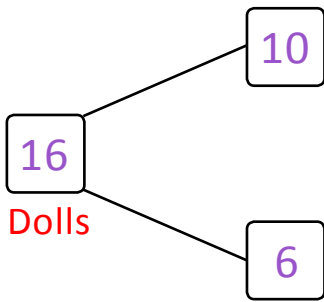
NAME \_\_\_\_\_ DATE \_\_\_\_\_

## ADDITION AND SUBTRACTION WORD PROBLEMS

Read the following word problems. Make a simple math drawing and write a number bond. Write a number sentence by crossing out from 10.

**Example:**

Alice has 10 Barbie dolls and 6 dog toys. She gave 5 Barbie dolls to her friend. How many dolls and toys are left with Alice in all?



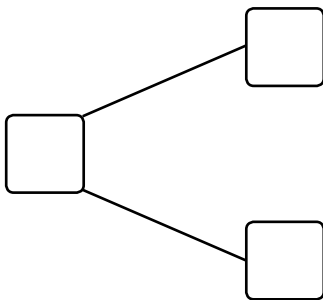
$$10 - 5 = 5$$



Alice has now 11 dolls.

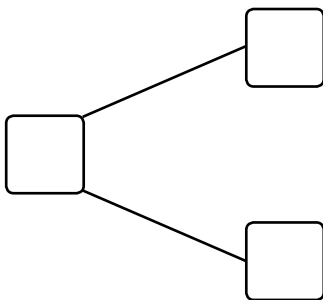
$$6 + 5 = 11$$

1) Mary baked 10 vanilla cupcakes and 5 chocolate cupcakes. She ate 7 vanilla cupcakes. How many cupcakes are left with Mary?



Mary is left with \_\_\_ cupcakes.

2) In a playground, 10 girls and 9 boys playing. After some time 4 girls stopped playing. How many children are still playing in the playground?



In the playground \_\_\_ children are still playing.