




NAME \_\_\_\_\_

DATE \_\_\_\_\_

## SUBTRACTIONS

See the picture and fill in the math story. Also show in a number bond.

Example:



In a zoo there are 11 lions. 8 lions are inside the cage. How many lions are outside the cage?

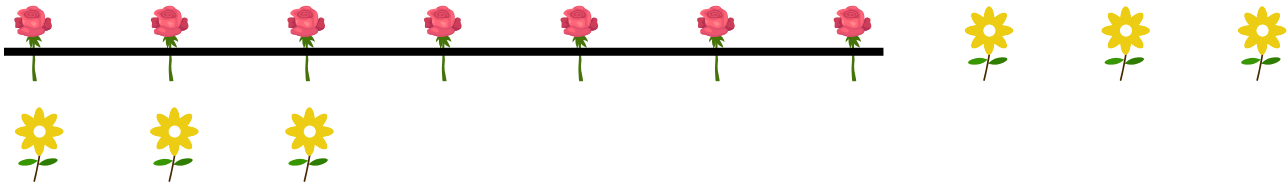
$$11 - 8 = 3.$$

$$\begin{array}{c} 11 \\ / \quad \backslash \\ 10 \quad 1 \end{array}$$

$$10 - 8 = 2$$


$$2 + 1 = 3$$

1)



There are \_\_\_ flowers in the basket. \_\_\_ flowers are rose flowers. How many are sunflowers?

2)



John has \_\_\_ candies. He ate \_\_\_ candies. How many candies are left?