

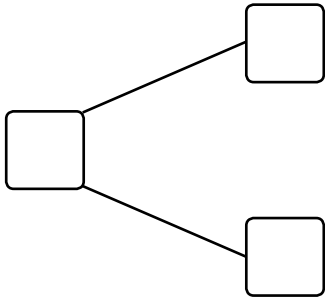


NAME _____ DATE _____

ADDITION AND SUBTRACTION WORD PROBLEMS

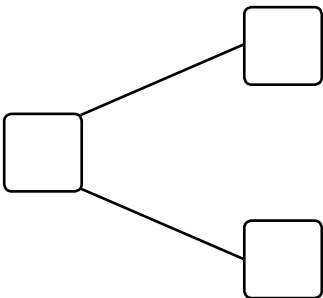
Read the following word problems. Make a simple math drawing and write a number bond. Write a number sentence by crossing out from 10.

- 1) There are 8 strawberries and 7 apples on the table. John ate 3 apples. How many fruits are left on the table?



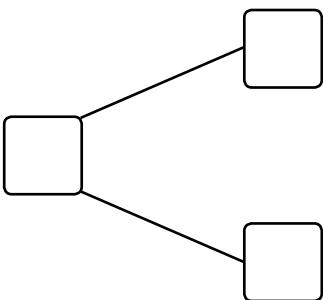
There are ___ fruits left on the table.

- 2) Daisy has stuck 9 star shape stickers and 9 diamond shape stickers on the wall. 4 of the star shape stickers fell down. How many stickers are still there on the wall in all?



There are ___ stickers still on the wall.

- 3) Bill has 7 cookies and his brother gave him 9 cookies more. Bill ate 3 cookies. How many cookies are left with Bill now?



Bill is left with ___ cookies.