



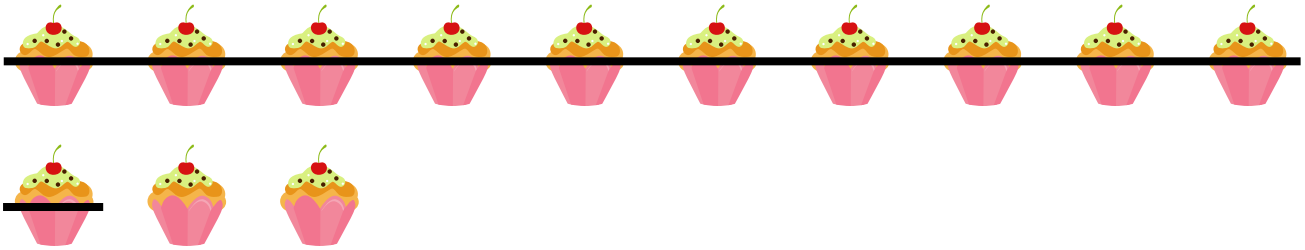
NAME _____

DATE _____

SUBTRACTIONS


See the picture and fill in the math story. Also show in a number bond.

1)




Rick made ____ muffins. He gave ____ muffins to his friends. How many muffins are left?

2)



Daisy has ____ dolls. She gave ____ dolls to her sister. How many dolls are left with Daisy?

3)



Todd got ____ toy car as gift. He got ____ red cars and some blue cars. How many blue cars Todd got as gift?