





NAME \_\_\_\_\_

DATE \_\_\_\_\_

## ADDITION AND SUBTRACTION WORD PROBLEMS



Read the following word problems. Make a simple math drawing and write a number bond. Write a number sentence by crossing out from 10.

- 1) Dora has 10 pink color fish and 8 gold fish in her fish tank. 2 of the gold fish jumped out of the tank. How many fish are remaining in the fish tank in all?

There are \_\_\_ fish remaining in the tank.

- 2) Andrew has 10 carrots and 7 beetroot. Andrew ate 3 carrots. How many vegetables are left with Andrew?

Andrew is left with \_\_\_ vegetables.

- 3) Jessica has 9 strawberry ice creams and 5 vanilla ice creams in fridge. She ate 3 strawberry ice creams. How many ice creams are left?


Jessica is left with \_\_\_ ice creams.