




NAME _____

DATE _____

SUBTRACTIONS


See the picture and fill in the math story. Also show in a number bond.

1)



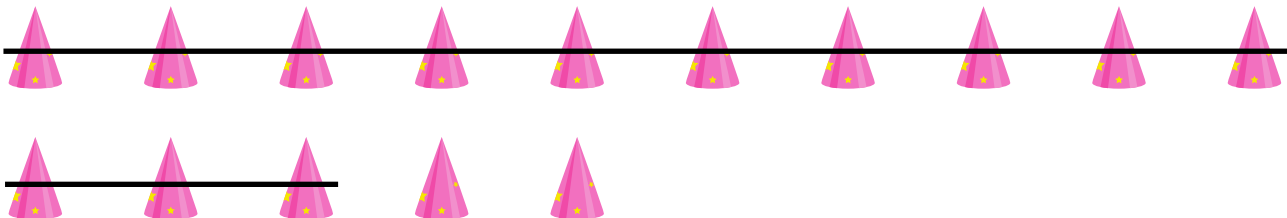
Lisa made ___ cookies. ___ cookies are chocochip cookies. How many cookies are not chocochip cookies?

2)



There are ___ children playing in the park. ___ children are girls. How many children are boys?

3)



Bob has ___ party hats. He gave ___ party hats to friends. How many party hats are left?