




NAME \_\_\_\_\_

DATE \_\_\_\_\_

## SUBTRACTIONS


See the picture and fill in the math story. Also show in a number bond.

1)



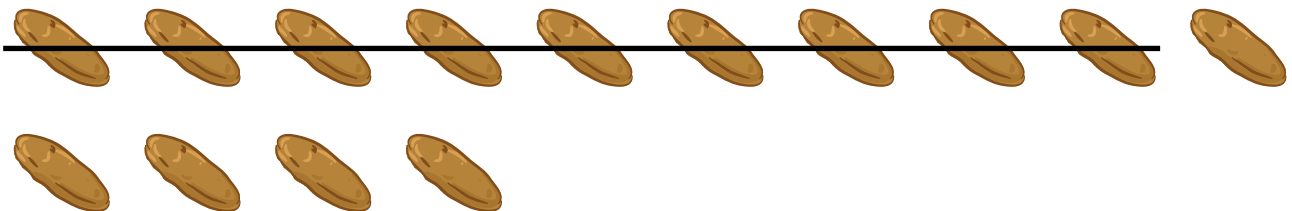
Oliva counted \_\_\_\_ birds. \_\_\_\_ birds are sparrows. The remaining are pigeons. How many pigeons Oliva counted ?

2)



Rick planted \_\_\_\_ rose plants. \_\_\_\_ plants have rose flowers. How many plants do not have rose flowers?

3)



Sara has \_\_\_\_ raisins. She ate \_\_\_\_ raisins. How many raisins are left?