



NAME _____ DATE _____


COMBINATION OF THE COINS

Verify and learn whether the combination of the coins equal to the given money.


Example:

Daniel has 25 cents in his piggy bank. Which coin or coins could be in Daniel's piggy bank?

a) Draw to show the coins that could be in Lee's bank.

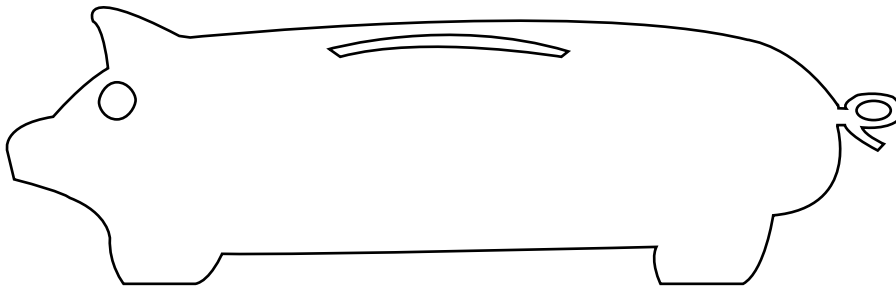


b) Draw a different set of coins that could be in Lee's bank.



1) Andrew has 30 cents in his piggy bank. Which coin or coins could be in Andrew's piggy bank?

a) Draw to show the coins that could be in Andrew's bank.



b) Draw a different set of coins that could be in Andrew's bank.

