



NAME _____

DATE _____

COIN VALUES


Write the value of each group of coins.

1)



___ cents.

2)




___ cents.

3)



___ cents.

4)




___ cents.

5)



___ cents.

6)



___ cents.

7)



___ cents.

8)



___ cents.