



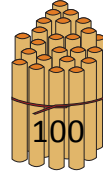
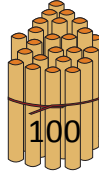

NAME _____

DATE _____

COUNTING THE NUMBERS

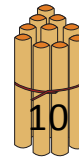
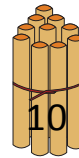
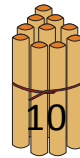
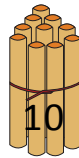
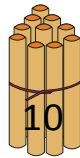
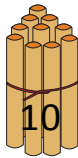
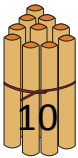
Counting the numbers by making the bundles 1's, 10's and 100's.

a) Bundles of 100's.



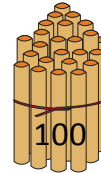
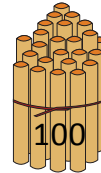
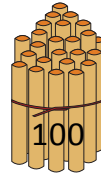
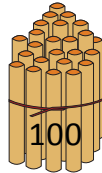
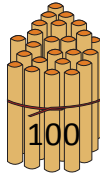
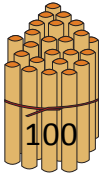
3 hundreds = _____.

b) Bundles of 10's.



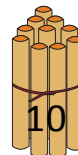
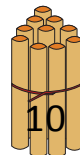
8 tens = _____.

c) Bundles of 100's.



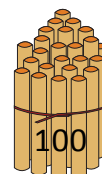
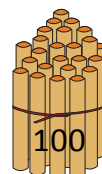
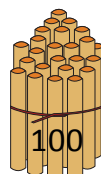
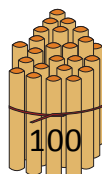

6 hundreds = _____.

d) Bundles of 10's.



2 tens = _____.

e) Bundles of 100's.



5 hundreds = _____.