



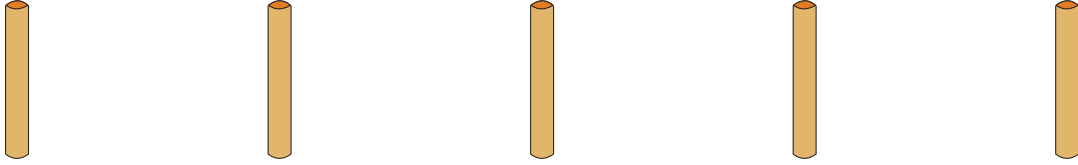
NAME _____

DATE _____

COUNTING THE NUMBERS

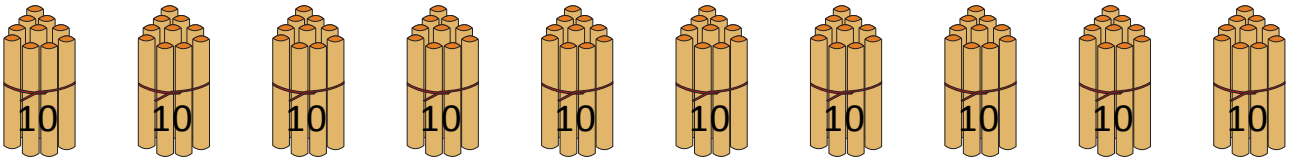
Counting the numbers by making the bundles 1's, 10's and 100's.

a) Bundles of 1's.



5 ones = ____.

b) Bundles of 10's.



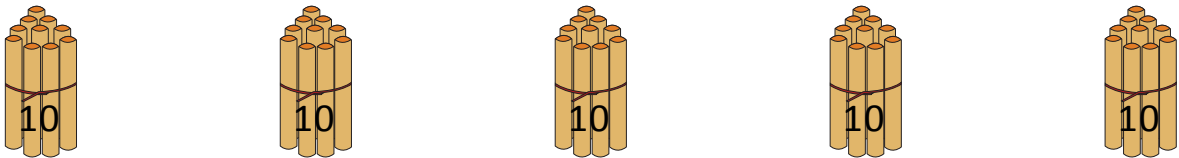
10 tens = ____.

c) Bundles of 100's.



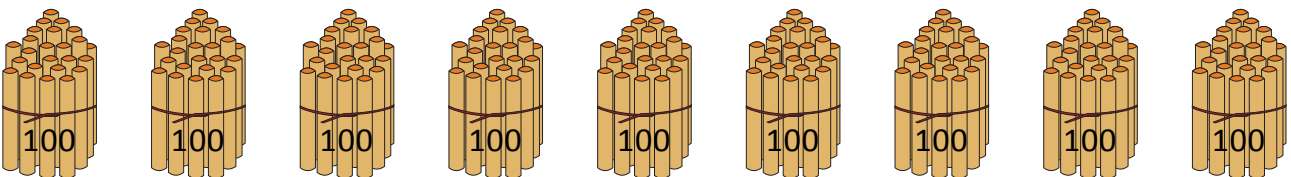
2 hundreds = ____.

d) Bundles of 10's.



5 tens = ____.

e) Bundles of 100's.



9 hundreds = ____.