



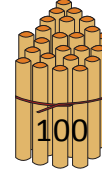
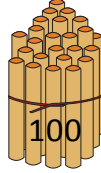
NAME _____

DATE _____

COUNTING THE NUMBERS

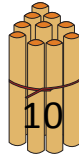
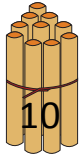
Counting the numbers by making the bundles 1's, 10's and 100's.

a) Bundles of 100's.



2 hundreds = _____.

b) Bundles of 10's.



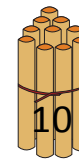
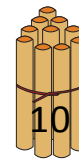
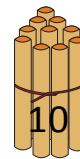
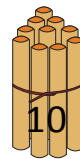
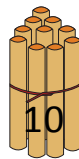
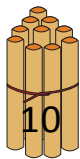
3 tens = _____.

c) Bundles of 1's.



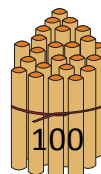
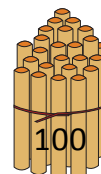
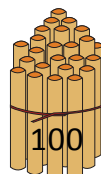
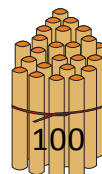


5 ones = _____.

d) Bundles of 10's.



6 tens = _____.

e) Bundles of 100's.



8 hundreds = _____.