

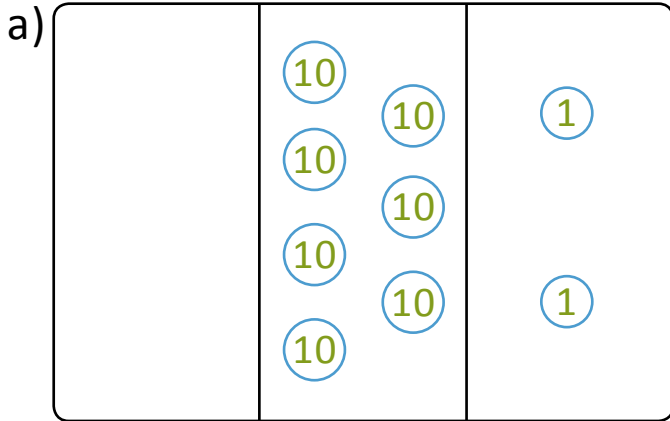


NAME \_\_\_\_\_ DATE \_\_\_\_\_

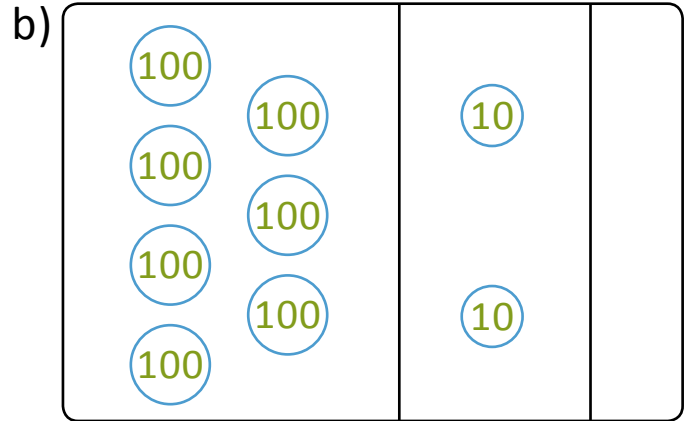
## FINDING NUMBERS BY CONVERSION

Conversion of ones into tens and tens into hundreds by using place value charts.

1) i) Tell the value of the following numbers.



a) \_\_\_\_\_



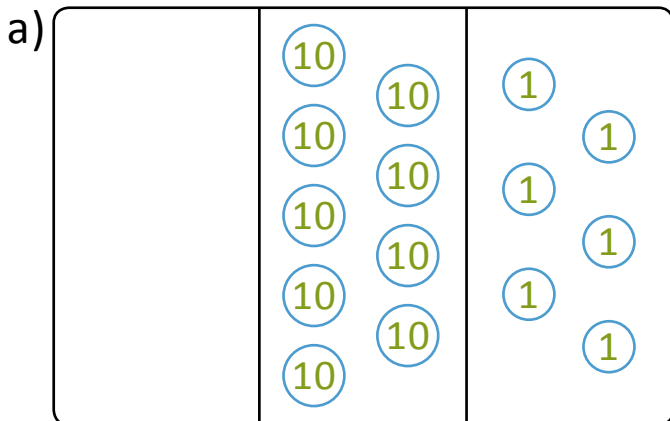
b) \_\_\_\_\_

ii) Fill in the sentences below to tell about the change from 72 to 720.

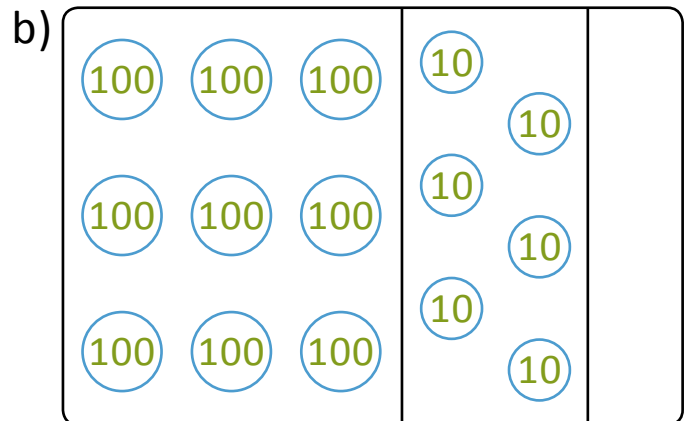
I changed \_\_\_\_\_ to \_\_\_\_\_.

I changed \_\_\_\_\_ to \_\_\_\_\_.

2) i) Tell the value of the following numbers.



a) \_\_\_\_\_



b) \_\_\_\_\_

ii) Fill in the sentences below to tell about the change from 96 to 960.

I changed \_\_\_\_\_ to \_\_\_\_\_.

I changed \_\_\_\_\_ to \_\_\_\_\_.