



NAME _____

DATE _____

DRAWING HANDS


Draw the minute hand and hour hand on the clocks.

Example:

2 : 00



1) 3 : 30




2) 5 : 00




3) 8 : 30




4) 7 : 00




5) 4 : 30




6) 11 : 00



7) 6 : 30



8) 6 : 00



9) 11 : 30

