




NAME _____ DATE _____


DRAW HANDS FOR THE CLOCKS

Draw the minute and hour hand on the clocks.


1) 11 : 00




2) 2 : 00




3) 5 : 30




4) 12 : 00




5) 7 : 00




6) 12 : 30




7) 3 : 00




8) 9 : 00




9) 10 : 00



10) 1 : 30



11) 8 : 00



12) 6 : 30

