




NAME _____

DATE _____

DRAWING HANDS

Draw the minute hand and hour hand on the clocks.


1) 1 : 00




2) 2 : 30



3) 8 : 00




4) 5 : 30




5) 4 : 00




6) 7 : 30



7) 12 : 00




8) 9 : 00




9) 10 : 30



10) 12 : 30



11) 10 : 00



12) 9 : 30

