




NAME _____

DATE _____


READING CLOCKS

Write the time shown on the clock or draw the missing hand on the clock.


Examples:




8 O' clock




Half past 3 O' clock



1)




2)




Half past 2 O' clock

3)




10 O' clock

4)




Half past 1 O' clock

5)




6)




Half past 7 O' clock

7)




Half past 11 O' clock

8)



2 O' clock

9)



Half past 5 O' clock