




NAME _____

DATE _____

READING CLOCKS


Write the time shown on the clock or draw the missing hand on the clock.

1)




4 O' clock

2)




Half past 8 O' clock

3)




4)




Half past 5 O' clock

5)




6)




Half past 3 O' clock

7)




11 O' clock

8)




Half past 7 O' clock

9)




10)




Half past 10 O' clock

11)



12)



Half past 2 O' clock