



NAME _____

DATE _____

MATCH THE FOLLOWING

Match the number sentences to the bonds you used to help you make a ten.

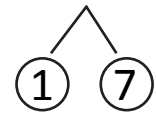
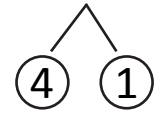
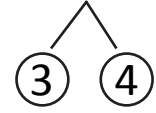
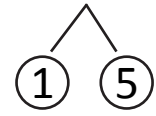
Example:

a) $9 + 5 = \underline{14}$

b) $\underline{15} = 9 + 6$

c) $8 + 9 = \underline{17}$

d) $\underline{14} = 7 + 7$

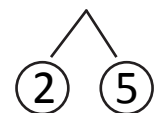
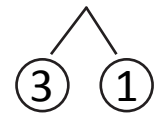
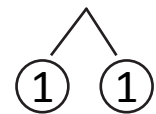
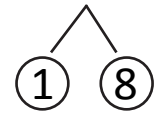


1. a) $9 + 2 = \underline{\quad}$

b) $\underline{\quad} = 9 + 4$

c) $9 + 9 = \underline{\quad}$

d) $\underline{\quad} = 7 + 8$



2. a) $7 + 6 = \underline{\quad}$

b) $\underline{\quad} = 6 + 6$

c) $8 + 7 = \underline{\quad}$

d) $\underline{\quad} = 9 + 5$

